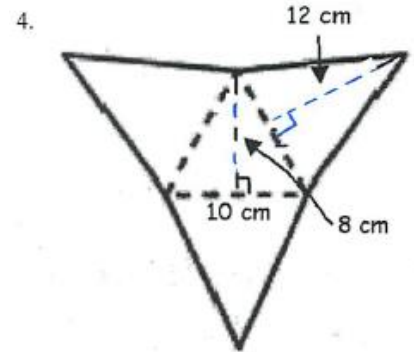
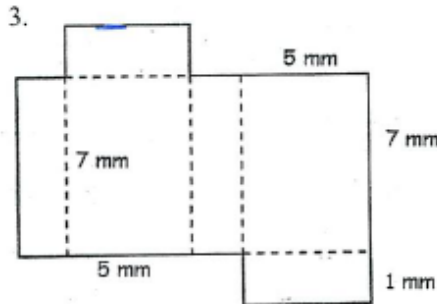
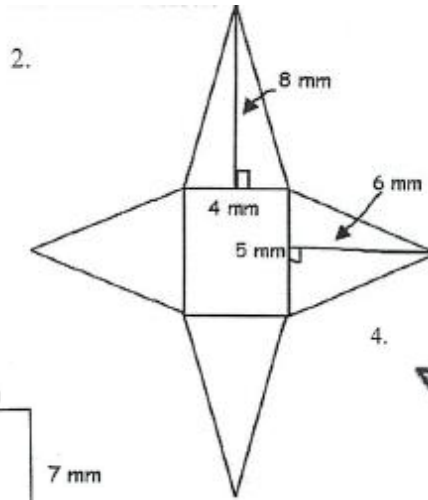
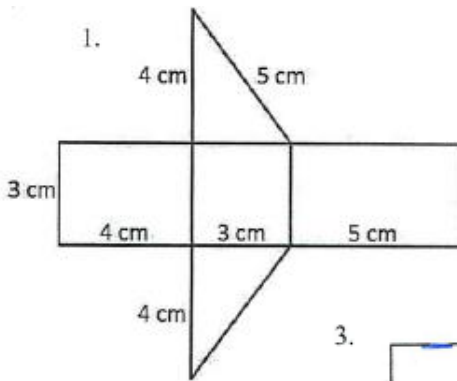


## GADOE Task: Finding Surface Area

For problems 1-4, write the name of each figure and find the surface area of the nets drawn below.



5. Choose one of the nets above and write a constructed response that explains the steps used to calculate the surface area of the figure.

For problems 6-10, name each figure, draw the NET, and find the surface area. Name each figure and the surface area of each figure.

